



Year 4	Social Studies	Time – 1 hour
--------	----------------	---------------

Name: \_\_\_\_\_  
Class: \_\_\_\_\_  
School: \_\_\_\_\_

Total Marks
-------------

**A) Work . Who can help me out? Fill in the blank spaces. (8 marks)**

*Ex. I need to buy stuff to cook. So I go to the **Grocer**.*

1. My car broke down. I go to the \_\_\_\_\_ to get it fixed.
2. I need to get furniture made for me. I need to go to the \_\_\_\_\_.
3. I need to get paint to white wash the wall and a few nails to hang the picture-frame. I buy these from the \_\_\_\_\_.
4. I need to build a room on the roof. First I go to the \_\_\_\_\_ to get a site-plan. Then I go to the \_\_\_\_\_ to build.
5. I am not feeling well and I have fever. The \_\_\_\_\_ checks me out. Then I go to the \_\_\_\_\_ to buy medicine.
6. I need to confess. I go to the \_\_\_\_\_.

**B) Work. Underline the correct word.**

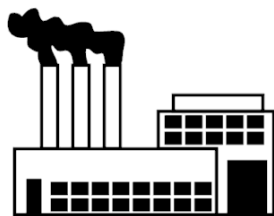
**(10 marks)**

*Ex: (The Priest, The Guide, The Carpenter) works with tourists.*

1. People who work in the country-side are known as (tin-smiths, farmers, taxi-drivers).
2. Every worker has a right to (a proper salary, a vacation every month, a gift on his birthday).
3. (The architect, The farmer, The roof maintenance-man) is no longer needed.
4. A trade that involves a lot of patience and manual work is (ganutell, teaching, a hawker).
5. There are many (houses, gardens, factories) next to each other in an Industrial Estate.
6. (The teacher, The pilot, The bus-driver) teaches you to read and write.
7. (A travel agent, A barman, A clerk), is probably a government employee.
8. (Builders, Chefs, Lawyers) normally work outdoors more than indoors.
9. The work of a (tin-smith, electrician, care-worker) is all about caring for others.
10. The work of a (physiotherapist, a tourist guide, a messenger) is related to health.



Illustration by Chris Gash



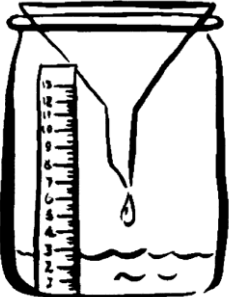
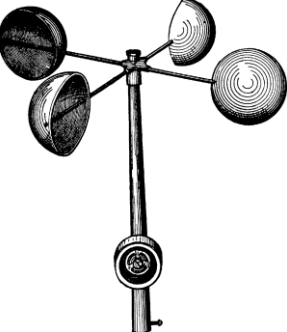


**C) Work. Match the workers with their duties by writing the number in the box. The first is an example. (7 marks)**

Workers		Their Duties
1. The farmer		catches fish.
2. The chef		builds houses according to the plan.
3. The bus-driver		prepares food.
4. The fisherman		gives information about places of interest.
5. The nurse		drives people from one place to another on time.
6. The tourist guide	1	grows fruit and vegetables.
7. The builder		sells medicine according to the doctor's prescription.
8. The pharmacist		sees to sick people.



D) The Weather. Fill in the blank spaces with the correct weather instrument. (8 marks)

<p>1.</p> 	<p>I am a _____.</p> <p>I show the _____</p> <p>_____.</p>
<p>2.</p> 	<p>I am a _____.</p> <p>I show the _____</p> <p>_____.</p>
<p>3.</p> 	<p>I am a _____.</p> <p>I show the _____</p> <p>_____.</p>
<p>4.</p> 	<p>I am a _____.</p> <p>I show the _____</p> <p>_____.</p>

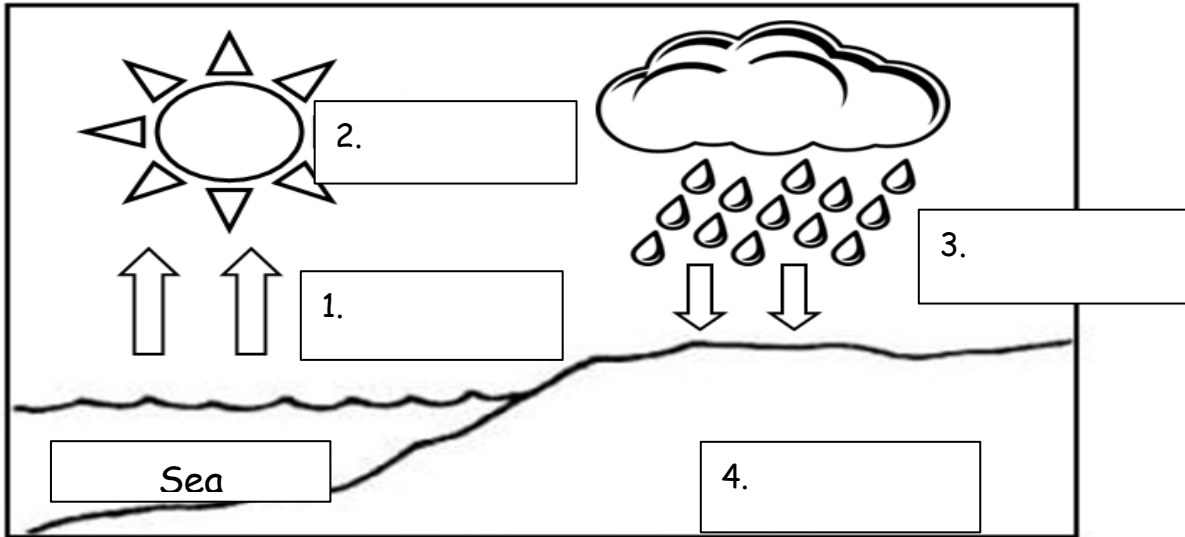
**E) The Weather.** Write whether True or False.

(10 marks)

<i>Ex: Weather changes according to the seasons.</i>	<b>True</b>
1. The compass indicates direction and always points to the South.	
2. We get a temperature of 8 degrees Celsius in Spring.	
3. A north-west wind is a cold wind.	
4. The Meteorological Office gives us the weather-forecast.	
5. In Summer it is very hot and the days become shorter.	
6. Cyclones, tyfoons and hurricanes always bring along a lot of rain and wind.	
7. It rains heavily and for a long time during a whirl-wind.	
8. We get a lot more fruit during dry weather.	
9. If the temperature increases, it gets cold.	
10. When the fields are on a hill, these are set at different levels so that the soil is not washed away with rain water.	



F) The Weather. Look at the picture and fill in the boxes. (4 marks)



G) The Weather. Fill in the blanks using the words below. (7 marks)

fields	rains	drink	sea
evaporates	wells	—valleys—	clouds

Ex: The sun evaporates the water from the sea, lakes and valleys.

- Vapour \_\_\_\_\_ and becomes \_\_\_\_\_.
- When clouds get too heavy, it \_\_\_\_\_.
- Running water can water the \_\_\_\_\_.
- Some water can gather in the \_\_\_\_\_ of our houses.
- In Malta, a lot of the rain water ends up in valleys or in the \_\_\_\_\_.
- Water is important so that we could \_\_\_\_\_, wash, water the crops and carry out other needs.

**H) Life in the Counry-side or Town. List the following activities in the correct column below.** *(10 marks)*

I learn guitar

I attend scouts

I attend MUSEUM

I form part of the church choir

I practice gymnastics

I attend mass


I take part in the procession

I form part of the village band club

I form part of the football Nursery

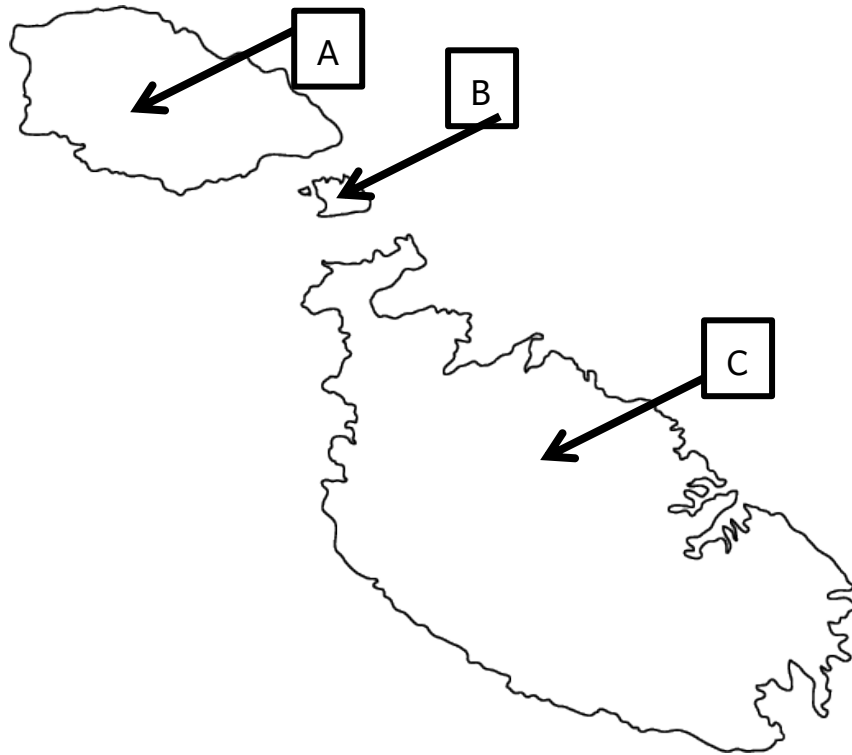
I am an altar-boy

Civic Activities	Religious Activities



H) Life in the Town or in the Country-Side. Fill in the blanks according to the map.

(6 marks)



1. This is the \_\_\_\_\_ of the Maltese Islands.
2. Island A is \_\_\_\_\_.
3. Island B is \_\_\_\_\_.
4. Island C is \_\_\_\_\_.
5. Mark with an X where your town or village is found.
6. Write the name of your town or village on the map above.



I) Life in the Country-Side or in the Town. Write five (5) sentences about your town or village. (10 marks)

---

---

---

---

---

---

---

---

---

---

---

---

---

---

---

---