

Name: _____

Class: _____

Department of Curriculum Management
Maths Support Team


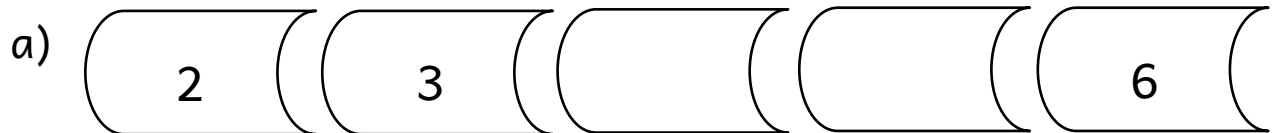
Half Yearly Alternative Examinations for Primary Schools 2017

LEVEL 1

MATHEMATICS WRITTEN PAPER

TIME: 1h 15min

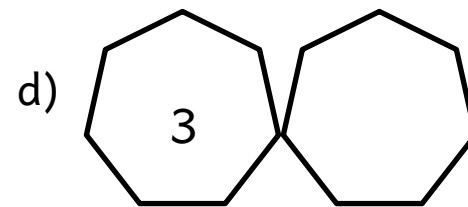
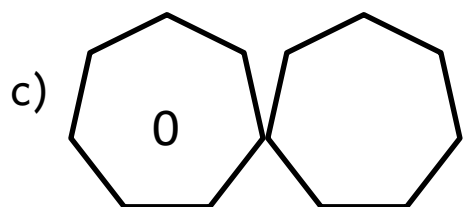
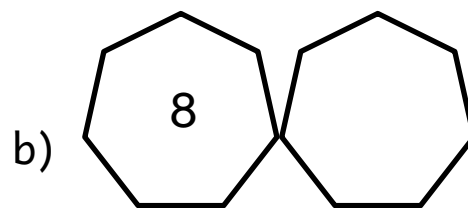
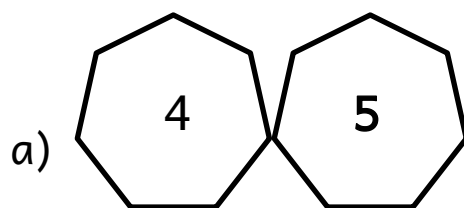
1. Fill in the missing numbers.



(4 marks)

2. Write one more.


The first one is an example.



(3 marks)


3a) Draw the correct number of spots on each ladybug.

i)



2 spots


ii)



6 spots


b) Count the number of spots on each ladybug.

i)



spots

ii)






spots

(4 marks)

4. Order these numbers from smallest to largest.


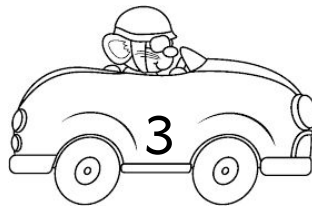

a)



smallest

largest

b)



smallest

largest

(6 marks)

5. Write the next 2 numbers.


a)

b)


(4 marks)

6. Circle the lighter object.

a)



b)



c)



(3 marks)

7. Make 10.

a) $\boxed{6} + \boxed{} = 10$

b) $\boxed{} + \boxed{3} = 10$

c) $\boxed{} + \boxed{} = 10$

(6 marks)

8. Circle the container which holds the least.

a)



b)



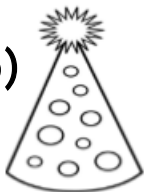
(2 marks)

9. Match.

a)



b)



c)



d)



e)



● sphere

● cylinder



● cube



● cuboid



● cone



(5 marks)

10. How many cupcakes are left?

a)   take away
1 cupcake _____ cupcakes


b)   take away
2 cupcakes _____ cupcakes

c)   take away
1 cupcake _____ cupcakes


d)   take away
2 cupcakes _____ cupcakes

(6 marks)

11a) Draw a longer pencil.



b) Draw a shorter tree.







(2 marks)

12. Fill in the day before or the day after

	Day Before	Day	Day After
a)	Sunday	Monday	
b)		Thursday	Friday
c)		Tuesday	Wednesday
d)		Sunday	

(5 marks)

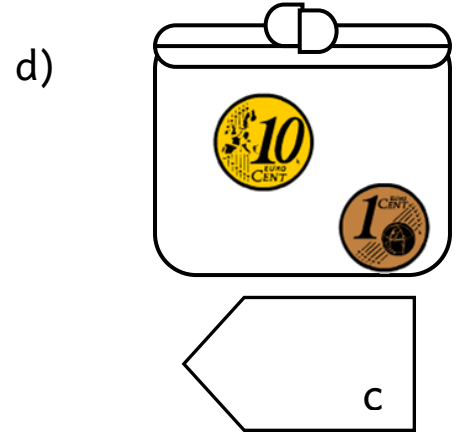
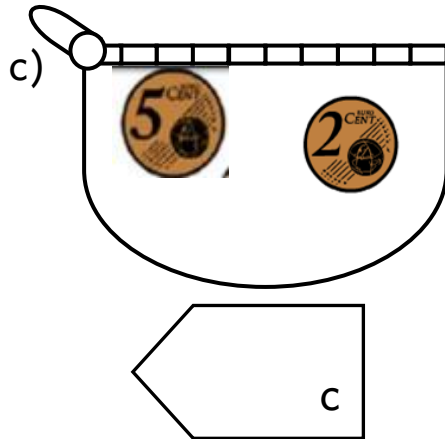
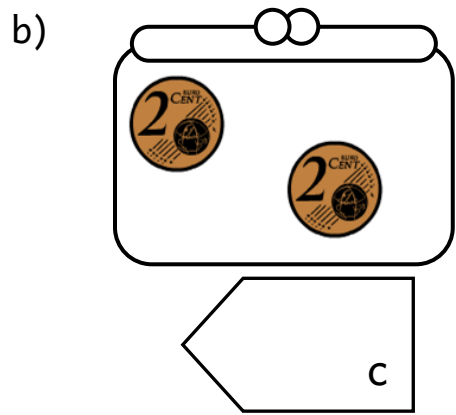
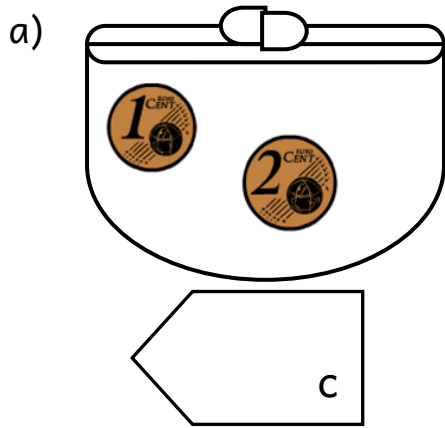
13. Draw these objects to complete the picture.

- a) 2 birds  above the boat
- b) 2 fish  below the boat
- c) 1 dog  beside the girl
- d) 1 cloud  next to the sun




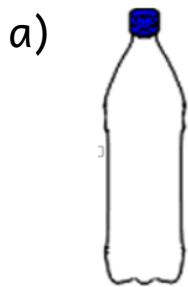
(6 marks)

14. How much money is there in each purse?



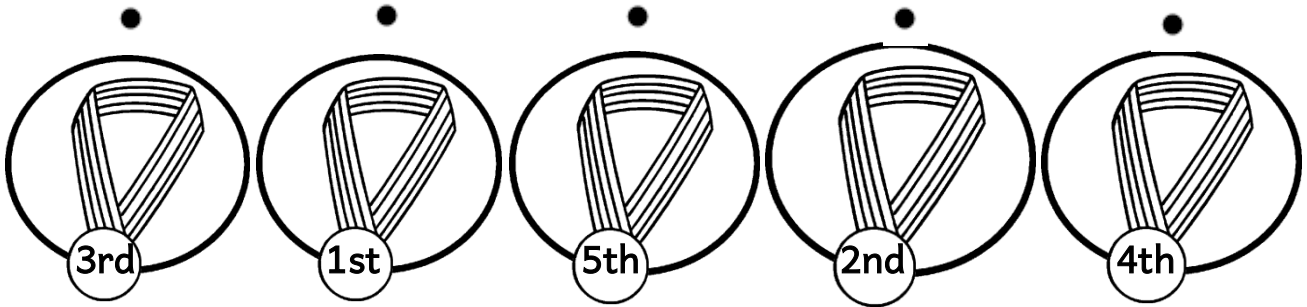
(4 marks)

15. Write full, half full or empty.



(3 marks)

16. Match each medal with the correct runner.




(5 marks)


17. Sort these animals by matching the animal with the box

2 legs

4 legs



a lion



a bird



a duck



a giraffe

(4 marks)

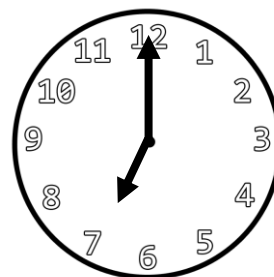
18a) What time does each clock face show?




i)



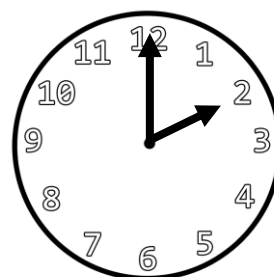
o'clock



ii)



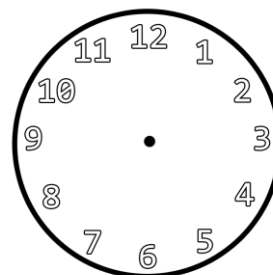
o'clock



b) Draw the hands on the clock.



4 o'clock



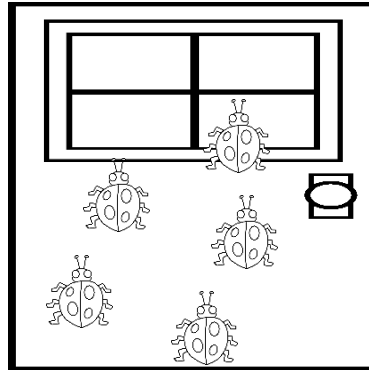
(4 marks)

19. Fill in with the correct number.

a) 5 ladybirds climb up the door.

2 fly away, now there are


ladybirds.



b) 7 monkeys are in a tree.

2 more monkeys go up, now there are

monkeys.



(4 marks)